


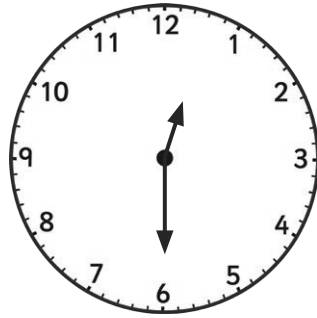
# Tell the Time in 24-Hour Format: Writing the Time Before and After

Tell the time on each clock, follow the instruction, and write in 24-hour format.  
All the times are between noon and midnight.



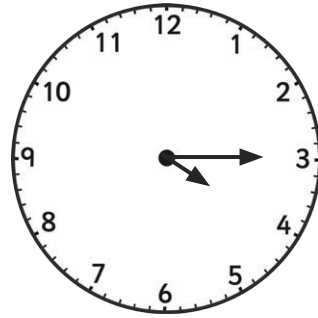
45 minutes before:

---




1 hour after:

---




35 minutes before:

---




an hour and a half after:

---



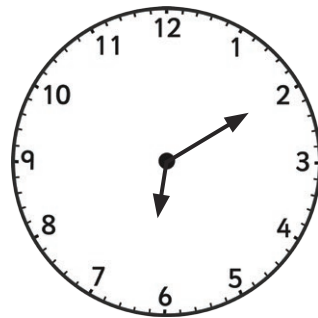
25 minutes before:

---



55 minutes after:

---



40 minutes before:

---



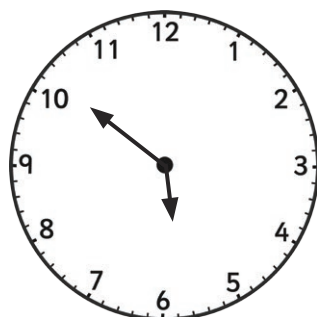
an hour and a quarter after:

---



19 minutes before:

---




48 minutes after:

---



62 minutes before:

---

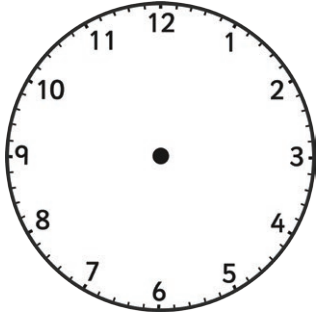


94 minutes after:

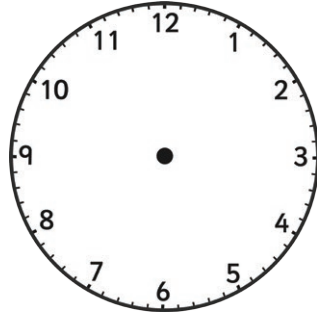
---

# Tell the Time in 24-Hour Format: Drawing the Time Before and After

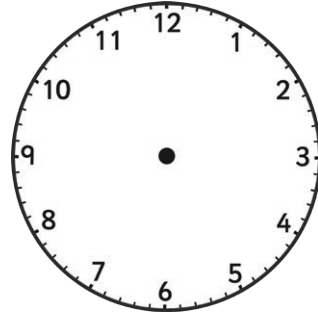
Draw the time on each clock.



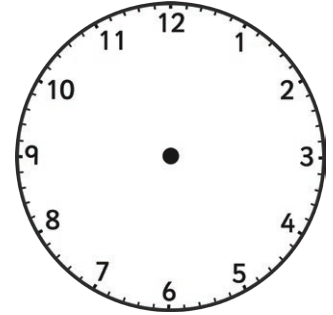
1 hour before  
14:00



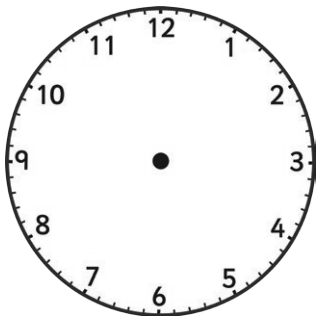
45 minutes after  
15:15



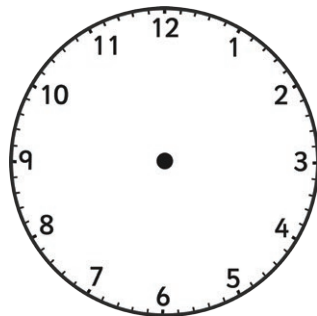
15 minutes before  
20:10



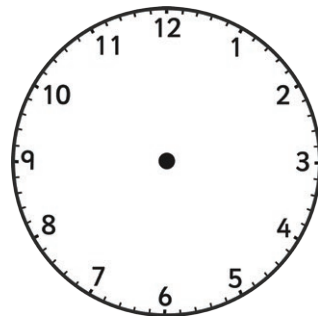
an hour and a quarter  
after 19:50



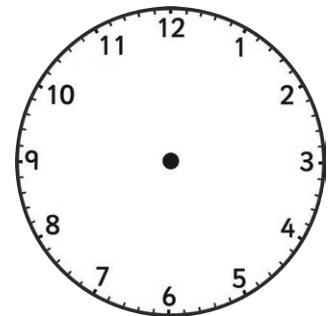
25 minutes before  
13:10



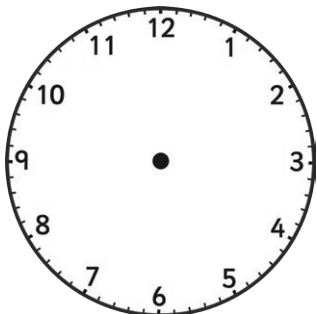
50 minutes after  
22:35



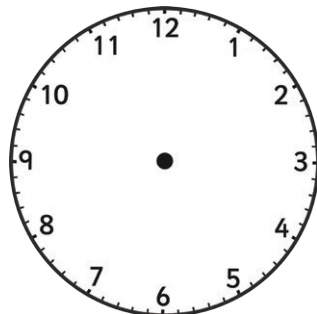
35 minutes before  
16:50



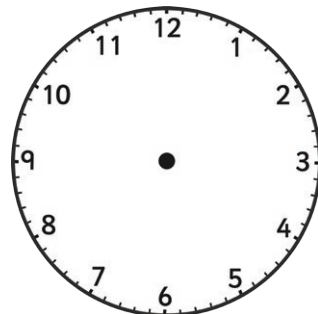
an hour and 50  
minutes after 20:25



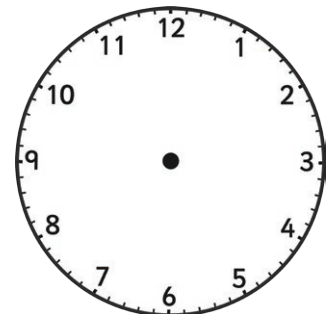
16 minutes before  
12:56



34 minutes after  
19:52




69 minutes before  
16:23



101 minutes after  
18:54

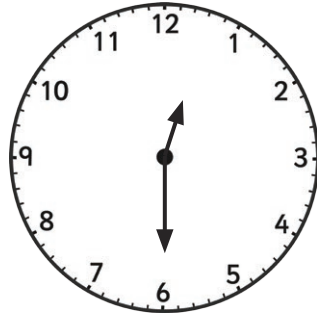
# Tell the Time in 24-Hour Format: Writing the Time Before and After Answers

Tell the time on each clock, follow the instruction, and write in 24-hour format.  
All the times are between noon and midnight.



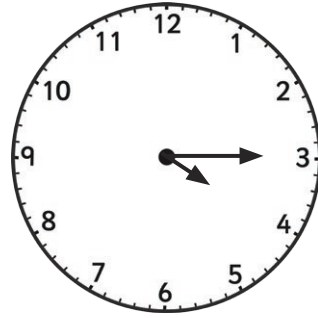
45 minutes before:

**16:15**




1 hour after:

**13:30**



35 minutes before:

**15:40**



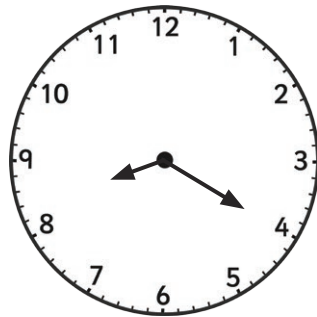
an hour and  
a half after:

**21:40**



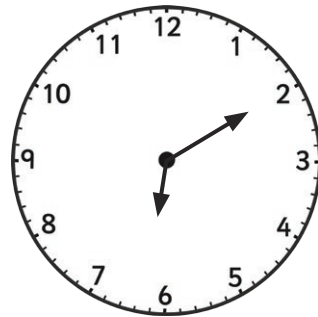
25 minutes before:

**13:15**



55 minutes after:

**21:15**



40 minutes before:

**17:30**



an hour and a  
quarter after:

**23:55**




19 minutes before:

**13:53**



48 minutes after:

**18:39**



62 minutes before:

**17:21**




94 minutes after:


**21:27**

# Tell the Time in 24-Hour Format: Drawing the Time Before and After Answers

Draw the time on each clock.




1 hour before  
14:00



45 minutes after  
15:15




15 minutes before  
20:10




an hour and a quarter  
after 19:50




25 minutes before  
13:10



50 minutes after  
22:35




35 minutes before  
16:50



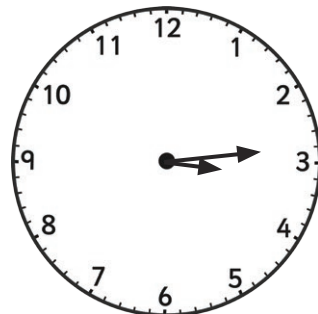
an hour and 50  
minutes after 20:25



16 minutes before  
12:56



34 minutes after  
19:52



69 minutes before  
16:23



101 minutes after  
18:54